

Workbook



Table of Contents

Introduction to Chemical Bonding	שגיאה! הסימניה אינה מוגדרת.
Lewis Theory of Chemical Bonding	שגיאה! הסימניה אינה מוגדרת.
Shapes of molecules - VSEPR theory.....	9

Introduction to Chemical Bonding

Lewis Theory of Chemical Bonding

Questions

1) Write the Lewis symbols for the following atoms:

- a. Ne
- b. P
- c. Cs
- d. I
- e. Sr
- f. Al
- g. Sn

2) Write the Lewis symbols for the following ions:

- a. Cl^-
- b. Ca^{2+}
- c. Cs^+
- d. Pb^{2+}

3) Write Lewis structures for the following structures:

- a. CHCl_3
- b. H_2S
- c. Cl_2
- d. CH_4O
- e. NH_4^+
- f. PO_3^{3-}

General Chemistry Workbook

4) Write Lewis structures for the following structures:

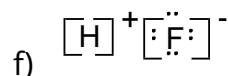
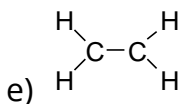
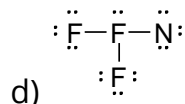
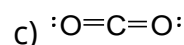
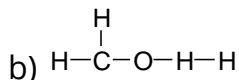
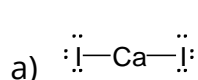
- N₂
- C₂H₄
- CN⁻
- COF₂

5) Write Lewis structures for the following ionic compounds:

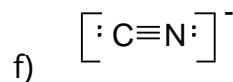
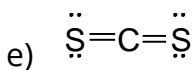
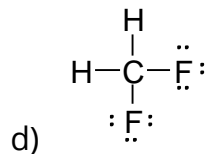
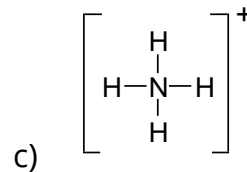
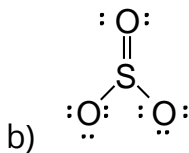
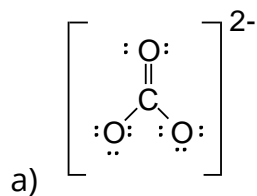
- calcium iodide
- potassium sulfide
- strontium oxide

6) State what is wrong with the following structures.

Write acceptable Lewis structures for each structure.

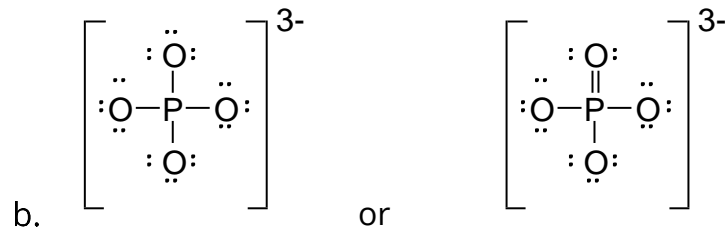
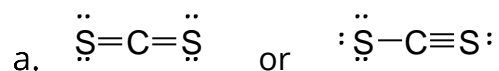


7) Calculate the formal charge of each atom in the following Lewis structures:

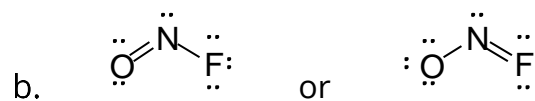
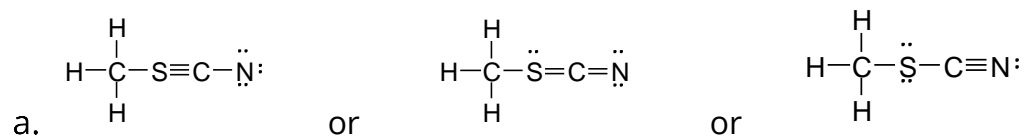


General Chemistry Workbook

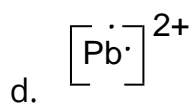
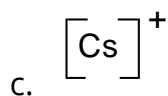
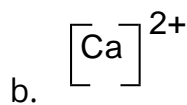
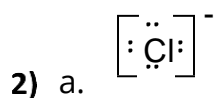
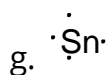
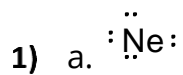
8) Which of the following is the more favorable Lewis structure?



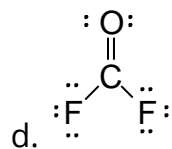
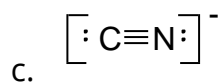
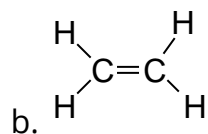
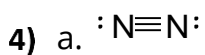
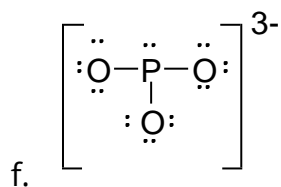
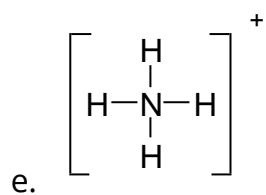
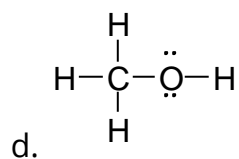
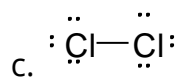
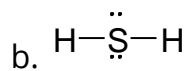
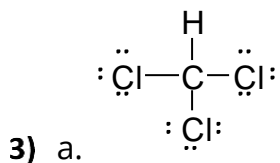
9) Which of the following is the more favorable Lewis structure?



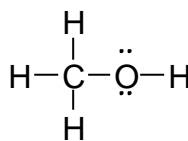
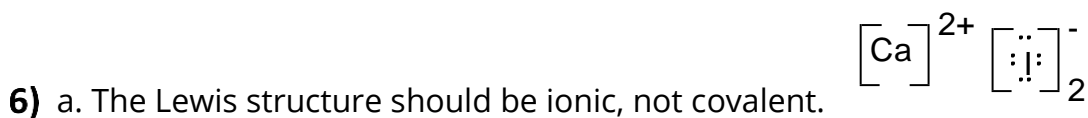
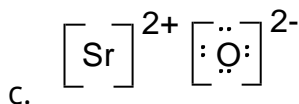
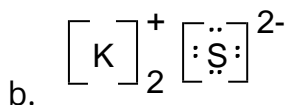
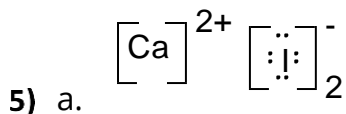
Answer Key



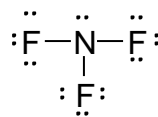
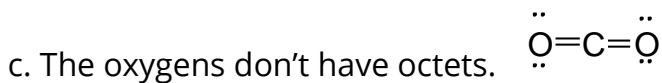
General Chemistry Workbook



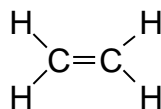
General Chemistry Workbook





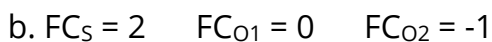
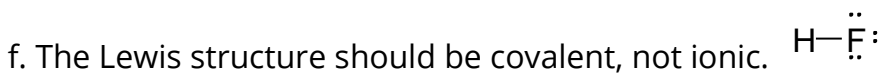
b. Hydrogen can't be a central atom.

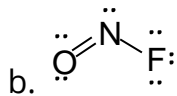
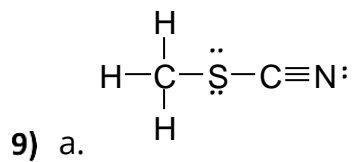
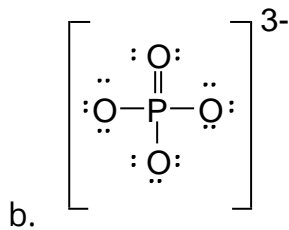
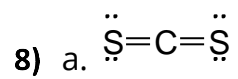


d. Fluorine can't be a central atom.



e. The carbons don't have octets.





Shapes of molecules - VSEPR theory

Questions

- 1) Use VSEPR theory to determine the electron group geometry and the molecular geometry of the following molecules:
- a) SCl_4
 - b) COH_2
 - c) CH_3OH

Answer Key

- 1) a. trigonal bipyramidal, seesaw.
b. trigonal planar, trigonal planar.
c. C: tetrahedral, tetrahedral.
O: tetrahedral, bent.